

ST. VIVEKANAND LOTUS VALLEY PUBLIC SCHOOL
SECTOR-18 HUDA, JAGADHRI

HOLIDAY

HOMework

CLASS-III

SESSION:2024-25

New session, new books and new friends have kept the kids buzzing for a while and now the much awaited vacation is here! Summer break is the best time of the year for parents and children alike. While parents get to spend the maximum time with their young ones during this period; for kids, it's time for family bonding, lots of ice cream, time to visit grandparents and getting pampered to no end.

Keeping this in mind, the subject wise assignments given as holidays homework have been planned with the view to make the optimum use of youngsters' energy and give a vent to their creativity so that the process of learning continues during the vacation as well. Parents' support and encouragement is sought to ascertain that the budding minds take out some time from long summer days and switch on the search energy of their minds in exploring and learning.

We hope that the students enjoy these holidays thoroughly in a way that they inculcate some values, virtues, and knowledge in the bargain!!!!

GENERAL INSTRUCTIONS

- Kindly follow the below mentioned instructions to do the Homework:
The Holidays Homework has been divided into separate Categories. For example:
 - Part – A (Written and Learning work)
 - Part – B (Models & Charts)
 - Part – C (Assignments)Do the Holidays Homework neatly & in legible handwriting.
- Apart from the Holidays Homework also help your ward to revise the syllabus done in the Class for all the subjects till date.
- Assignments (Part-C of Holiday Homework) should be done neatly by taking printouts on A-4 sheets.
- After completion of assignments, paste it in respective subject notebooks.
- The work should be original and not copied from Internet.
- The models, charts and Assignments should be submitted to the respective subject teacher.
- The holiday homework would be marked out of 10 marks for each subject.
- Models should be strictly made on the guidelines prescribed.
- Best models/charts will be displayed in the Summer Project Exhibition and the student will demonstrate it.
- Holiday homework should be submitted on July 5, 2024 i.e. Friday.

NOTICE:-

The school will be closed for Summer Vacation from May 28, 2024 to July 1, 2024. It will reopen on July 2, 2024, with the same school timings.

The School also desires you to adhere to the following guidelines for a fulfilling break:

- 1. Wake up early in the morning.*
- 2. Follow a Fitness Routine. Do easy exercises / go for running with your parents early in the morning.*
- 3. Indulge yourself in Sports and Games.*
- 4. Study well.*
- 5. Maintain Good Health and Hygiene.*
- 6. Enroll yourself in any Hobby Class.*
- 7. Read books to keep reading alive.*
- 8. Stay indoors and in shaded places as much as possible.*
- 9. Use an umbrella / hat / cap when outside.*
- 10. Drink enough water and salted drinks (lemonade, fruit juices, ORS) frequently. Avoid junk food & eat healthy homemade food.*
- 11. Keep & take care of indoor plants to reduce room temperature.*
- 12. Respect & obey your elders.*



Kindly take a note that every student has to make the models as per the subject assigned.
The charts of all subjects have to be made as per the Roll Nos. allotted.

III Rose – English , Maths, Science (any two as per your choice)

III Daisy – Hindi, S.St, Science (any two as per your choice)

ENGLISH

PART-A

- Revise all the work done in the class.
- Write 15 pages of calligraphy in 3 in 1 notebook.
- Write the creative (10-15 lines) on the following topics:- Cat, Elephant.

To be done in BBC

- Super test assignment -2(Pg. no.20)
- Do page no. 51 to 55 ,120 to 122

PART -B

CHARTS

Make a beautiful chart as per your Roll no. -

- Roll No. 1-18 →Rules of singular and plural with examples. Learn the rules well
- Roll No. 19 onwards →Pronouns and their use. Paste pictures related to it.

MODEL

- Roll No. 1-12→ Make a wind chime "Parts of Noun ". Learn the definition and examples well.
- Roll No. 13-24→Make a model of any animal and learn 10 – 15 lines on it.
- Roll No. 25 onwards →Make a model of "Underwater" scene and learn to explain it well.

MATHS

PART -A

- Revise all the work done in the class.
- Learn and write tables from 2 to 12 (in separate 3 in 1 note book)
- Solve worksheet 2 to 5 of Ch – 4 in Maths workbook.

PART-B

CHARTS

Make a beautiful chart as per your Roll No. -

- Roll No. 1 to 19 →Place value and face value with definition and examples.
- Roll No.20 onwards →3D Shapes

MODELS

Make a beautiful model as per your Roll No.

- Roll No. 1 to 13 → A Robot using different 3 D shapes.
- Roll No. 14 to 26 → A working model of Addition wheel.
- Roll No. 27 onwards → A working model of multiplication table wheel.

SCIENCE

PART-A

- **Revise all the work done in the class.**
To be done in separate 3 in 1 notebook.
- Write defines of Ch-1 to 4 and learn them well.

PART- B

CHART

Make a beautiful chart as per your Roll No.-

- Roll No. 1 to 18 → Balanced diet
- Roll No. 19 onwards → Healthy and Unhealthy food

MODELS

- Roll No. 1 to 12 → Make a model of a house good to live in. (Refer pg no.18 in science book)
- Roll No. 13 to 24 → Make a soil profile in a glass jar.
- Roll No. 25 onwards → Make a beautiful terrarium.

SOCIAL STUDIES

PART -A

- **Revise and learn the syllabus done in the class.**
- Mark all the states on the political map of India (pg no.42) of student book.
- Do pg no.14,15 ,16,17 of work book (Ch - 3)
To be done in separate 3 in 1 notebook.
- Write and learn definitions of CH 1,2,4&5

PART-B

CHART

Make a beautiful chart as per your Roll No.

- Roll No. 1-19 → Different traditional dresses worn in different states. (At least 8 – 10) Draw or paste pictures related to it.
- Roll No. 20 onwards → Community helpers and the places they work at (At least 8 -10)
For eg.- Greengrocer -- market.

MODELS

Make a beautiful 3D model as per your Roll No.-

- Roll No. 1-12 → Any two traditional attires using paper & decorative materials.
- Roll No. 13-25 → Collection of spices (in a box using glass jars or different compartments). Learn one use of each.
- Roll No. 26 onwards → Model of places in a neighbourhood

हिंदी

भाग - क

- कक्षा में कराए गए सम्पूर्ण कार्य की पुनरावृत्ति करें।

To be done in 3-in-1 notebook

1. 15 पृष्ठ सुलेख लिखें और अक्षरों की बनावट सही होनी चाहिए।
2. निम्नलिखित विषयों पर सृजनात्मक लेख 10-15 पंक्तियों में लिखें-

मेरा पालतू पशु:-

1. गाय
2. बिल्ली

3. घर में पाई जाने वाली किन्हीं 10 पुल्लिंग और 10 स्त्रीलिंग वस्तुओं की सूची बनाएँ।

भाग- ख

चार्ट

- अपने अनुक्रमांक अनुसार सुंदर चार्ट तैयार करें-

Roll No. 1-13 → डाकघर की किन्हीं 4 बचत योजनाओं के बारे में लिखें व याद करें और उनसे संबंधित चित्र चिपकाएँ।

Roll No. 14-26 → एक चार्ट पर वृक्ष का चित्र बनाकर उस पर परिवार के सदस्यों का चित्र चिपकाएँ और सभी सदस्यों के विषय में 2-3 पंक्तियाँ लिखें।

Roll No. 27-38 → एक चार्ट पर गीले और सूखे कूड़े के किस रंग के कूड़ेदान का प्रयोग किया जाता है, यह लिख कर कूड़ेदानों का चित्र बनाएँ या चिपकाएँ।

मॉडल

Roll No. 1-13 → एक गत्ते की सहायता से हरे और नीले कूड़ेदान का मॉडल तैयार करें।

Roll No. 14-26 → किसी भी स्थान का मॉडल बनाएँ और उस पर 10-15 पंक्तियाँ याद करें।

उदाहरण – मेरा विद्यालय, मेरा घर, बगीचा, पार्क, अस्पताल, बाज़ार आदि

Roll No. 27-38 → 10-15 पर्यायवाची शब्दों का चित्र सहित मॉडल बनाएँ। (Flip Cardson a Thermocole sheet)

COMPUTER

Learn & Revise Chapter 1&2

ProjectWork:-

1. Rollno.1-20 → Make a chart on Input and Output devices. Paste/Draw pictures.
2. Rollno.21 onwards → Make a chart of different types of Memory Devices.

ART & CRAFT

Class III Rose

Make any object using paper Quilling (Ref. Pg. no. 21) (Roll No. 1 to 18)

Make a spectroscope (Ref. Pg. no. 36) (Roll No. 19 onwards)

Class III Daisy

Make a Chinese lantern (Refer Pg. no. 13) (Roll No. 1 to 18)

Make a Pen stand (Ref Pg. no. 28) (Roll no. 19 onwards)

G.K

- Revise all the work done in class.

Page No. 7 to 15

PART-C

(Printouts of the following Assignments to be taken, solve them and paste in subject notebook).

English Assignment-1 Ch-3 (Who's on Divya's Map?)

1. Choose the correct option:

i. Ravi lived in_____.

- a) Gajapur b) Cuttack (c) Delhi d) Goa

ii. Ravi was going to travel on his own time for the _____ time.

- a) first b) second c) third d) fourth

iii Who were sitting at the shop?

- a) Binoy uncle b) Sarita aunty c) Botha and b d) None of these

iv. Who were sitting under the Banyan tree ?

- a) Mohan uncle b) Ramesh uncle c) Saritaaunty d) Divya

2. Fill in the blanks.

1. _____map had worked.

2. Divya drew a _____ rectangle forthe post office.

3. Banyan tree is next to the_____ hospital.

4. A _____shows you which route to follow.

5. Women were washing _____at the pond.

Assignment-2 Chapter- 5 (Dive!)

1. Choose the correct option:

i. _____ a perfect day for diving!

a) Blue skies and calm waters

b) blue skies and wavy waters

c) Cloudy sky and calm waters

ii. **Who guarded their sea anemone?**

a) Clownfish

b) lionfish

c) batfish

iii. _____ are the masters of disguise.

a) Octopus

b) pipefish

c) both a and b

iv. _____ is an incredible experience.

a) Scuba diving

b) Sky diving

c) None of these

2. Mark the statement as True or False.

i. Reef octopus was playing hide and seek..

ii. Parrotfish changed their colour.

iii. Honeycomb maray eel was having its teeth cleaned by cleaner wrasses.

iv. We should not check the equipment before diving.

Maths Assignment-1 (Ch-3)

I. Choose the correct option:

1. $630 - \underline{\hspace{2cm}} = 600$

- a) 100 b) 500 c) 30 d) 5

2. $3165 + 0 =$

- a) 0 b) 360 c) 3165 d) 3561

3) $20 + 17 = 37$, $37 - 17 =$ _____

- a) 19 b) 17 c) 20 d) 0

4) Kavita had 220 stamps. She gave away 101 stamps. She is left with _____ stamps.

- a) 100 b) 119 c) 109 d) 199

5) The difference between the smallest 2-digit number and smallest 3-digit number is

- a) 999 b) 90 c) 900 d) 990

2. Fill in the blank.

1) $650 - 50 =$ _____

2) 100 less than 624 = _____

3) $4300 - 1500 =$ _____

4) $800 - \underline{\hspace{2cm}} = 600$

5) $951 - \underline{\hspace{2cm}} = 900$

3. Complete the following fact families.

1) $88 + 12 = 100$

_____ - _____ = _____

_____ - _____ = _____

2) $980 + 20 = 1000$

_____ - _____ = _____

_____ - _____ = _____

4. Subtract the following:

3587

-2326

6556

-4326

8988

-7888

2539

-1235

4455

-1122

4531

-1256



Assignment -2 (Ch-4)

I. Choose the correct option:

1. The surface of a solid is called _____.

- a) face b) Corner c) edge d) Point

2. A Cuboid has _____ number of corners.

- a) 4 b) 12 c) 8 d) 10

3. Number of Corners in a square are.

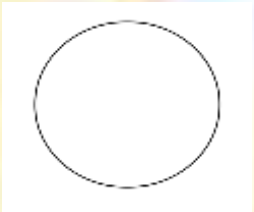
- a) 1 b) 2 c) 3 d) 4

4. The point where the edges of a solid meet is called the

- a) face b) Corner c) edge d) point

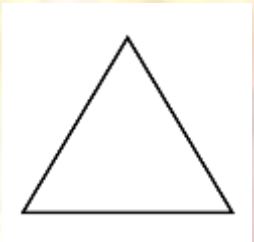
II. Name each shape and draw real life example for the same.


a)



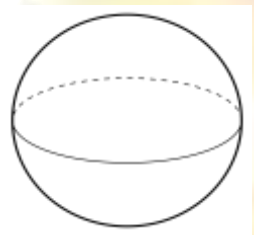


b)



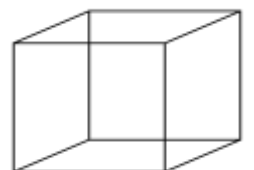


c)





d)

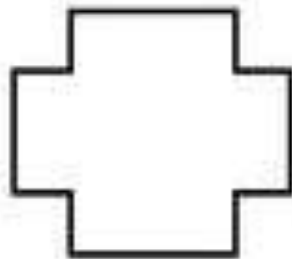

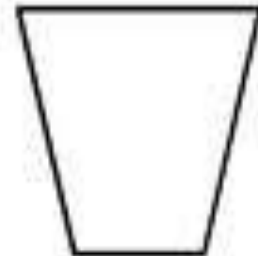





III. Draw an object using only curved lines.

IV. Draw a line of symmetry in the following figures.

Lines of Symmetry



Science (Assignment-1) Ch-3 (Rocks and Soil)

1. Choose the correct option:

i) Which of the following animals do not live in soil?

- a) Cats b) Ants c) Beetles d) Earthworms

ii) The formation of sand dunes is an example of blowing away of topsoil by _____.

- a) trees b) Sunlight c) Wind d) Water

iii) Which of these will never become soil?

- a) Rocks b) Leaves c) Mango Peels d) Plastic

iv) Which of the following practices helps to conserve soil?

- a) Continue throwing plastic and metal wastes in soil b) Plant more trees
c) Continue throwing more chemicals d) None of these

v) Which of the following is not a component of soil?

- a) Cement b) Minerals c) Microorganisms d) Silt

2. Fill in the blanks.

i) Plants take in _____ and minerals from the soil. (sunlight/water)

ii) Rocks break down into smaller pieces due to the action of _____, wind and the sun's heat. (animals/ rain).

iii) _____ is the portion of the earth's surface which is formed by breaking down of rocks into fine particles. (Sand/Soil)

iv) The topmost layer of the Earth where plants grow is called _____. (atmosphere/soil)

3. Write True or False.

i) The remains of dead plants and animals is called atmosphere.

ii) The topmost layer of the soil is called topsoil.

iii) The colour of soil depends on the rock present in a particular area.

Assignment-2 Chapter-4 (Living and Non-Living Things)

1. Choose the correct option.

i. Which of these is a living thing?

- a) Water b) Mushroom c) Rocks d) Air

ii. Which of the following is done by all living things?

- a) Talk b) Sleep c) Walk d) Grow

iii. Which of these is a natural non-living thing?

- a) Sand b) Building c) Paper d) None

iv. A young sunflower plant bends towards the_____.

- a) Sun b) Water c) Earth d) Moon

v. A crow flies from one place to another using its_____.

- a) Wings b) fins c) feet d) legs

vi. Gills are found in a_____.

- a) bird b) fish c) lion d) plant

2. Write True or False.

i) Fish breathe in water through small slits on their body called gills.

ii) Plants need rock to grow.

iii) Living things breathe air.

iv) Things around us are divided into three groups.

v) All man-made things are non-living things such as toys, pencils, pens, chairs and tables.

Social Science Assignment 1 Ch-2 (Our Neighbourhood)

A. Choose the correct option.

1. We should always keep our neighbourhood _____.

- a) Dirty b) Noisy c) Crowdy d) Clean

2. In order to fight against dangerous diseases, doctors and nurses give infants _____.

- a) Vaccines b) Body check up c) tablets d) Syrups

3. The _____ puts off the fire.

- a) Policeman b) Fireman c) Doctor d) All of these

4. A Postman delivers _____.

- a) food b) Medicines c) Letters and Parcels d) clothes

5. We buy green vegetables and fruits from _____.

- a) Bank b) Market c) School d) None of these

B. Write True or False for the given statement.

1. We should not throw garbage outside our house.

2. Good neighbours celebrate all the festivals and functions together.

3. We go to police station when we are not well.

4. A park is a place where we play with our friends.

5. We go to a Hospital to deposit or withdraw money.

Social-Studies Assignment -2 Ch-5 (My India)

I. Choose the correct option.

i. India is the _____ largest country in the world.

- a) Third b) Seventh c) Second d) All of these

ii. The _____ plateau is the largest Plateau in India.

- a) Southern b) Deccan c) Eastern Ghats d) Western Ghats

iii. India shares its borders with _____ neighbouring countries.

- a) 3 b) 8 c) 4 d) 9

iv. The Great Indian Desert is also known as the _____.

- a) Deccan b) Thar c) Arabian d) All of these

v. The word 'Himalaya' means _____.

- a) Glacier b) adobe of snow c) Range d) None of these

II. Give one-word answer:

i. Name the highest peak in the world.

ii. An area which is surrounded by water on three sides.

III. Write True or False for the given statement.

(i) The Southern plateau covers most of the peninsular region.

(ii) The Lakshadweep Islands are located in the Bay of Bengal.

(ii) India has nine Union Territories.

हिंदी कार्य पत्रिका- 1 (पाठ 2- एक याद)

प्रश्न 1- पाठ के आधार पर बताएँ किसने किस को कहा।

1. जीवन में कभी हार न मानो। _____
2. मुझे आपका ऑटोग्राफ चाहिए। _____
- 3 लाओ, तारीख भी लिख देता हूँ। _____

प्रश्न 2- निम्नलिखित प्रश्नों के उत्तर दीजिए:-

(क) भारत में नवम्बर का दिन किस रूप में मनाया जाता है।

उत्तर- _____

(ख) चाचाजी ने तारीख किस भाषा में डाली ?

उत्तर- _____

(ग) बच्चे जवाहरलाल नेहरू जी को क्या कह कर पुकारते थे ?

उत्तर- _____

प्रश्न 3- पठित गद्यांश के आधार पर प्रश्नों के उत्तर दीजिए-

आज़ाद भारत -----जिंदाबाद (Page no. 9)

प्रश्न 1- आज़ाद भारत के प्रथम प्रधानमंत्री कौन थे?

उत्तर- _____

प्रश्न 2- बच्चे 'चाचा नेहरू' किसे कहते थे?

उत्तर- _____

प्रश्न 3- नेहरू जी बच्चों को हँसता देखकर कैसा महसूस करते थे?

उत्तर- _____

प्रश्न 4- प्रस्तुत गद्यांश किस पाठ से लिया गया है?

उत्तर- _____

प्रश्न 5- 'अभिनंदन' शब्द का अर्थ लिखकर वाक्य प्रयोग करें।

अभिनंदन _____

कार्यपत्रिका 2 (पाठ 4 -स्वच्छता से स्वास्थ्य)

प्रश्न 1-निम्नलिखित वाक्यों में रिक्त स्थानों की पूर्ति कीजिए -

- (क) एक दिन गली में _____ बेचने वाला आया था।
(ख) चारों तरफ _____ फैली दिख रही थी।
(ग)केतन और जतिन बहुत अच्छे _____ थे।
(घ) हमें आस-पास भी _____ का पूरा ध्यान रखना चाहिए।

प्रश्न 2- निम्नलिखित प्रश्नों के उत्तर एक वाक्य में दीजिए।

(क)केतन और जतिन का आपस में क्या रिश्ता था?

(ख) जतिन ने क्या निश्चय किया?

(ग)हम स्वस्थ कैसे रह सकते हैं?

(घ) हम कैसा भोजन खाने से बीमार पड़ जाते हैं?

प्रश्न 3- निम्नलिखित पठित गद्यांश को पढ़कर नीचे दिए प्रश्नों के उत्तर दीजिए! -

अगले रविवार _____ स्वस्थ रहें। (Pg. 17)

प्रश्न 1-रविवार को कौन अपने मित्रों को लेकर आएगा ?

प्रश्न2-कूड़ा कहाँ फेंकना चाहिए?

प्रश्न3-कूड़ा घर किसके द्वारा बनाए गए हैं?

प्रश्न4-'स्वच्छ' शब्द का अर्थ लिखकर वाक्य में प्रयोग कीजिए!-

स्वच्छ- _____

कार्यपत्रिका 3(पाठ 3 – डाकघर)

प्रश्न 1- निम्नलिखित वाक्यों में रिक्त स्थानों की पूर्ति कीजिए -

- (क) ____ डाक के कार्यालय को कहते हैं।
(ख) तीसरी ओर _____ वाला बैठता है।
(ग) डाकघर रूपये भेजने में भी हमारी _____ करता है।
(घ) दूसरी ओर _____ करने वाला बैठता है।

प्रश्न 2- दिए गए वाक्यों में सही उत्तर पर (✓) निशान लगाएँ और लिखें।

- (क) डाक घर से हमें बहुत _____ है। (लाभ/हानि)
(ख) डाकघर रिश्तेदारों को पैसे भेजने में हमारी _____ करता है। (सहायता / असहायता)
(ग) डाकघर की योजनाएँ जनसाधारण के बीच _____ सिद्ध हुईं। (लोकप्रिय / अलोकप्रिय)

प्रश्न 3- निम्नलिखित प्रश्नों के उत्तर दीजिए-

(क) डाकघर में खाता खुलवाकर पासबुक पर क्या लगवाया जाता है?

(ख) डाकघर की किंहीं दो सुविधाओं के नाम लिखो।

(ग) डाकघर में पार्सल को रजिस्टर करने के बाद क्या दिया जाता है?

Computer Assignment-1 (Chapter- 1)

A. Tick the correct option.

1. Icons on the desktop are present in the form of

- | | | | |
|-------------------|--------------------------|------------------|--------------------------|
| a. small pictures | <input type="checkbox"/> | b. small tool | <input type="checkbox"/> |
| c. small sections | <input type="checkbox"/> | d. None of these | <input type="checkbox"/> |

2. The Button on the title bar which is used to close the window.

- | | | | |
|-------------|--------------------------|-------------|--------------------------|
| a. Close | <input type="checkbox"/> | b. Minimize | <input type="checkbox"/> |
| c. Maximize | <input type="checkbox"/> | d. Start | <input type="checkbox"/> |

3. This makes a computer work when electricity goes off.

- | | | | |
|---------|--------------------------|------------------|--------------------------|
| a. CPU | <input type="checkbox"/> | b. UPS | <input type="checkbox"/> |
| c. Both | <input type="checkbox"/> | d. None of these | <input type="checkbox"/> |

B. Write 'T' for true and 'F' for false.

- | | |
|---|--------------------------|
| 1. Start button is present at the right corner of the screen. | <input type="checkbox"/> |
| 2. Icons are present on the desktop. | <input type="checkbox"/> |
| 3. UPS is called convertor of the computer. | <input type="checkbox"/> |
| 4. Start menu is not used to shut down the computer. | <input type="checkbox"/> |

C. Fill in the blanks using the hints given below:

(Clock, CPU, Desktop)

1. The first screen which appears on the monitor is called the _____.
2. _____ switches off itself when you shut down a computer.
3. The taskbar contains Start button and _____.

Computer Assignment-2 Chapter-2

A. Tick the correct option:

1. A pen drive can _____ the information.
a) Store b) process c) enter
2. Diameter of a DVD is _____
a) 10cm b) 12cm c) 12mm
3. Storage capacity of a CD can be upto _____
a) 650MB b) 750MB c) 700 MB
4. _____ Is not a secondary memory device.
a) RAM b) Memory Card c) Pen Drive

A. Fill in the blanks:-

- a. Smallest unit of memory is _____
- b. Pen drive is a _____ device.
- c. RAM is _____ memory.
- d. _____ Drive is external memory.
- e. Diameter of a CD is _____ cm.

B. Write True or False:-

- a. Memory in RAM is permanent.
- b. Memory in ROM is temporary.
- c. Internal memory is also called Primary memory.
- d. A DVD has more storage capacity than a CD.

G.K Assignment

Write the names of the following current ministers.

1. Prime Minister of our country. _____
2. Chief Minister of your state. _____
3. Education Minister of India. _____
4. Education Minister of your state. _____
5. President of India. _____

• Fill in the blanks with the help of given options.

(Cactus, howl, Salamander, bark, leaves, honk)

1. _____ is an amphibian.
2. Do not _____ in front of a hospital.
3. Dogs _____, while wolves _____.
4. A caterpillar eats _____.
5. _____ can be found in a desert.

• Answer the following questions in brief.

1. Write the types of pollution.

2. Why do we need water?

3. Write some examples of water bodies.

4. Name four reptiles.

15. Complete the given pattern.

2B 4D ____ 8H ____ ____ 14 N